

HALMASHAURI YA JIJI DODOMA

MAZOEZI YA NYUMBANI SOMO LA MAARIFA YA JAMII DARASA LA IV 2020.

SEHEMU A: MAJIBU YA KUCHAGUA.

1. Chagua jibu lililo sahihi zaidi

- i. Ipi kati ya njia zifuatazo sio njia sahihi ya kulinda mazingira yetu?
- a. Kutumia mbolea za viwandani na kufuga wanyama wengi mno.
 - b. kutumia njia nzuri za kilimo.
 - c. Kulinda maji na vyanzo vyake
 - d. Kupanda miti upya maeneo yasiyo na miti.
- ii. Kipi kati ya hivi vifuatavyo ni hitaji la muhimu na la msingi kwa binadamu?
- A. Luninga.
 - B. Simu ya mkononi.
 - C. fedha.
 - D. Chakula.
- iii. Kitendo cha watu wawili au zaidi kufanyakazi kwa pamoja ili kufikia lengo fulani hujulikana kama?
- A. Uhusiano
 - B. Urafiki Mwema
 - C. Ushirikiano
 - D. Utamaduni
- iv. Ipi hapa ni haki ya mtoto?
- A. Kuajiriwa.
 - B. kupelekwa hospitali anapokuwa mgonjwa.
 - C. Kula vibanzi kila siku.
 - D. Kuendesha gari jipya.
- v. Nyarubanjaniainayaukabilaambaoulikuwaumeeneakatikamaeneoya?
- A. Kigoma
 - B. Pwani
 - C. Manyara
 - D. Kagera
- vi. Jamhuriya Muungano wa Tanzania nimuunganikowanchimbiliambazonina.....
- A. Tanganyika na Zanzibar.
 - B. Tanzania na Zanzibar.

- C. Pemba na Unguja.
- D. Tanganyika na Tanzania.

vii. Kitu kimoja kati ya hivi vifuatavyo siyo kitu muhimu katika ramani.

- a. kichwa cha ramani
- b. ukingowaramani.
- c. Dira.
- d. Pichawima.

viii. Ni sera ipi ya Uchumi ilianzishwa na Raisi John Pombe Magufuli?

- A. Ujamaa na kujitegemea
- B. Sera ya Uchumi waviwanda
- C. Sera ya ubifisishaji
- D. Uchumi wasokohuria

ULINGANISHO.

2. Oanisha maneno yaliyoko kundi A na yale ya kundi B ili ya lete maana sahihi.


SN	kundi A.	Majibu.	kundi B.
i.	Njiazina zotumi wanasayarika kulizungukajua.		A. Kilimo
ii.	Ni kipindi cha miaka elfumoja.		B. 1907.
iii.	Mwaka ambao vita ya Majimaji iliisha.		C. Utalii.
iv.	Rasilimali ya asili.		D. Karne.
v.	Ni shughulikuu ya kiuchumi.		E. Mileniamu.
vi.	Kilimanjaro, Serengeti, Mikumina Manyara.		F. Obiti
			G. Ardhi.
			H. 1905

SEHEMU B. (ALAMA 22)



3. Andika Majibu sahihi kwenye nafasi zilizoachwa wazi.


- i. Upungufu au ukosefu wa mvua kwa kipindi kirefu hujulikana kama _____
- ii. Rais wa awamu ya tano wa Tanzania anaitwa _____
- iii. Habari za kihistoria zinazotolewa kwa njia ya mazungumzo. _____
- iv. Baba wa baba yako unamwitaje ? _____
- v. Kifaa kinachotumika kupima jotoridi hujulikana kama _____
- vi. Tanganyika ilipatauhuru wake mnamo mwaka gani? _____
- vii _____ ni jumla ya vitu vyote vinavyomzunguka binadamu.

4. Andika majina ya alama zifuatazo zinazopatikana kwenye ramani.

i.  Hii inaitwa.....

ii.  Jina la alama hii ni.....



iii. Alama hii inaitwa.....


iv. Hii ni alama ya

SECTION A: MULTIPLE CHOICE.

1. Choose the most correct answer.

- i. Which one of the following is not a way of keeping our environment clean?
- a. Use of chemical fertilizers and overgrazing.
 - b. use of good methods of farming
 - c. conservation of water and water sources
 - d. Afforestation and reforestation
- ii. Which of the following is the most important basic need to the human beings?
- a. Television set.
 - b. Mobile phone.
 - c. Money.
 - d. Food.
- iii. The action of two or more people working together in order to reach a certain goal is known as:
- a. Relationship
 - b. Good friendship
 - c. Cooperation
 - d. Culture
- iv. Which of the following is a right to a child?
- a. To be employed.
 - b. To be taken to the hospital when sick.
 - c. To eat chips every day.
 - d. To drive a new car.
- v. Nyarubanja was a type of feudalism that was practiced in which region?
- a. In Kigoma
 - b. In Manyara
 - c. Along the coast
 - d. In Kagera
- vi. The United Republic of Tanzania is a union between.....and.....
- a. Tanganyika and Zanzibar.
 - b. Tanzania and Zanzibar.
 - c. Pemba and Unguja.
 - d. Tanganyika and Tanzania.
- vii. One of the following is not among the essentials of a map.
- a. Title/ heading.
 - b. Margin.
 - c. Compass direction.

- d. Vertical photograph
- viii. Which economic policy was introduced by President John Pombe Magufuli?
- Socialism and Self-reliance
 - Industrialization policy
 - Privatization policy
 - Free market economy



MATCHING ITEMS.

2. Match items of List A with those in list B to make correct statements.


SN	LIST A.	ANSWER.	LIST B.
i	The paths through which the planets use to revolve around the sun.		A. Agriculture.
ii	A period of thousand years.		B. In 1907.
iii	Majimaji war ended up		C. Tourism
iv	It is a natural resource.		D. Century.
v	The major economic activity.		E. Millennium.
vi	Kilimanjaro, Serengeti, Mikumi, Manyara		F. Orbit
			G. Land.
			H. 1905.

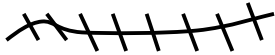
SECTION B: (22 MARKS)

1. Answer the following questions by filling in the blanks with the correct answers

- Absence or shortage of rainfall for a long period of time is called _____
- Who is the fifth president of Tanzania? _____
- Historical information given by a word of mouth.
- How do you call the father of your father? _____
- An instrument used to measure temperature is called _____
- In which year did Tanganyika get her independence? _____
- _____ is the total of all things which surround human beings

4. Write the names of the following symbols.

i.  This symbol is called



ii. This feature is called



iii.  This feature is called.....



v. This is a symbol of